

Unit 10: Measurement and Geometry
Review Worksheet Lesson 1-5

I. Customary Units. Complete the chart by filling in the missing values.

Common Customary Units

Length	Weight	Capacity
1 foot = _____ inches	1 pound = _____ ounces	1 cup = _____ fluid ounces
1 yard = _____ inches	1 ton = _____ pounds	1 pint = _____ cups
1 yard = _____ feet		1 quart = _____ pints
1 mile = _____ feet		1 gallon = _____ quarts
		1 gallon = _____ fluid ounces

Convert

- | | |
|----------------------|-----------------------|
| 1. 176 oz = _____ lb | 2. 12 c = _____ pints |
| 3. 5 mi = _____ ft | 4. 8,000 lb = _____ T |
| 5. 144 ft = _____ yd | 6. 48 qt = _____ gal |

Compare using <, >, or =.

- | | |
|----------------------|-----------------------|
| 7. 8 ft _____ 97 in. | 8. 42 lb _____ 700 oz |
| 9. 32 pt _____ 2 gal | 10. 15 c _____ 135 oz |

II. Metric Units

Convert.

- | | |
|------------------------|-----------------------|
| 11. 136 m = _____ km | 12. 348 cm = _____ mm |
| 13. 5,689 mg = _____ g | 14. 4.8 L = _____ mL |

Compare using $<$, $>$, or $=$.

15. 15,000 m _____ 15 km

16. 52.4 kg _____ 5240 g

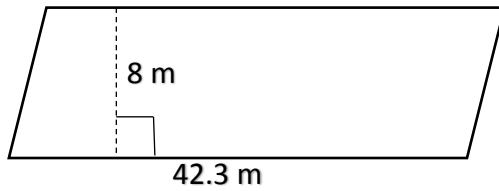
17. 13 L _____ 1300 mL

18. 18.5 g _____ 18,500 mg

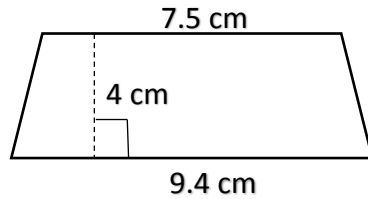
III. Area of Rectangles, Parallelograms, Triangles, Trapezoids, and Composite Figures

Find the area of the shapes.

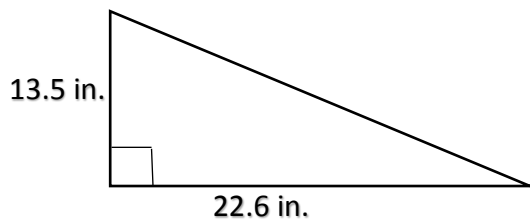
19.



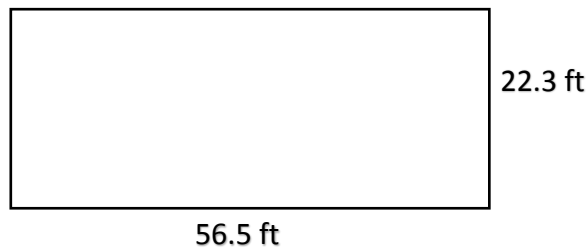
20.



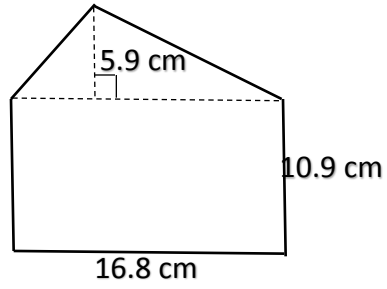
21.



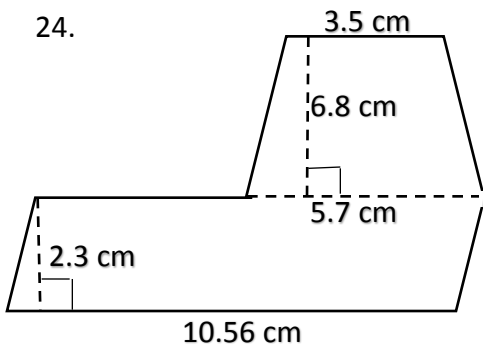
22.



23.



24.



25.

