

LESSON

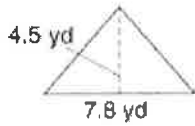
4

Measurement and Geometry

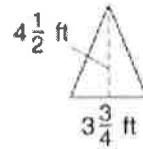
Practice C: Area of Triangles and Trapezoids

Find the area of each triangle.

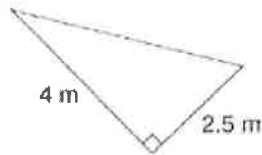
1.



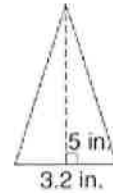
2.



3.

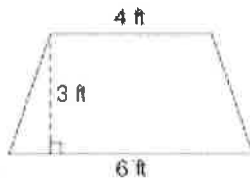


4.

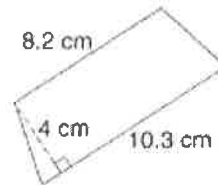


Find the area of each trapezoid.

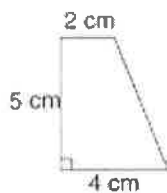
5.



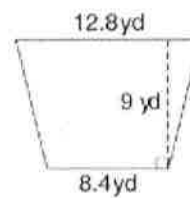
6.



7.



8.



9. A kite is formed by two congruent triangles with 6.2 cm bases and heights of 8.5 cm. What is the area of the entire kite?

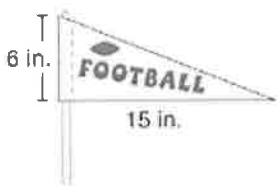
LESSON
4

Measurement and Geometry

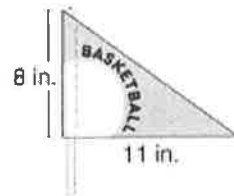
Challenge: Pennant Problems

Find the amount of felt used to make each pennant.


1.



2.



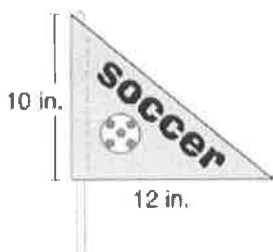
3.



4.



5.



6.



7. List the pennants in order from least area to greatest area.